

What am I?

Write the correct number using clues given.



I have 2 in the ones place and 4 in the tens place. I am

42

I have 7 in the ones place and 3 in the tens place. I am

I have 5 in the ones place. I am more than 20 but less than 30. What am I?

I have 3 in the ones place. My value is greater than 45 but less than 57. What am I?


I have 6 in the hundreds place, 4 in the tens place and 7 in the ones place. What am I?

I have 5 in the ones place and 8 in the tens place. I am greater than 600 but less than 800. What am I?

I have 3 in the ones place and 7 in the tens place. I am greater than 535 but less than 630. What am I?

Hundreds, Tens, and Ones (I)


Name _____ Date _____



Value

Write how many hundreds, tens, and ones. Then write the number.

1.




_____ hundreds _____ tens
_____ ones = _____

2.




_____ hundreds _____ tens
_____ ones = _____

3.




_____ hundreds _____ tens
_____ ones = _____

4.




_____ hundreds _____ tens
_____ ones = _____

5.



_____ hundreds _____ tens
_____ ones = _____


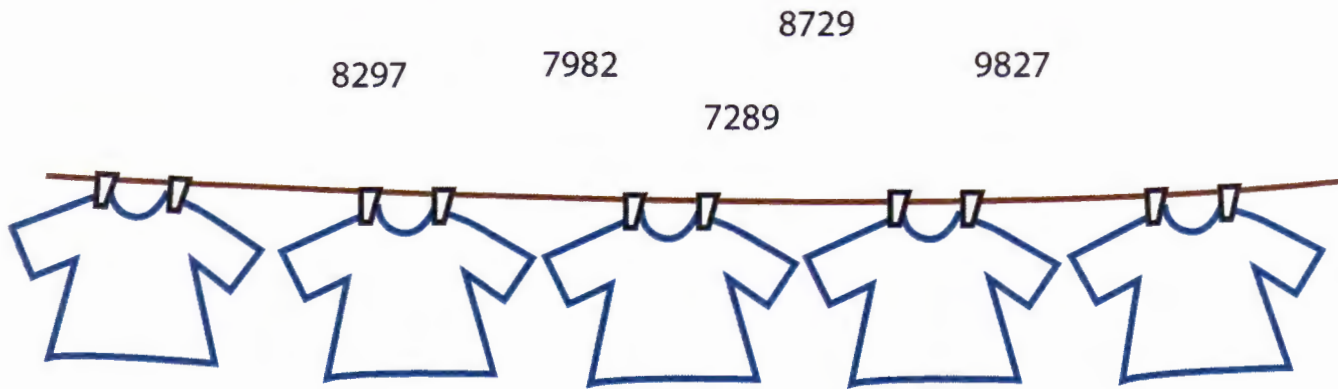
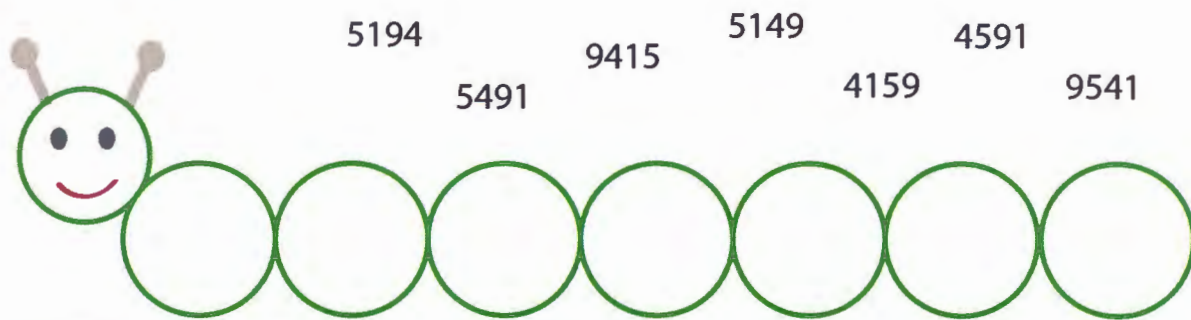
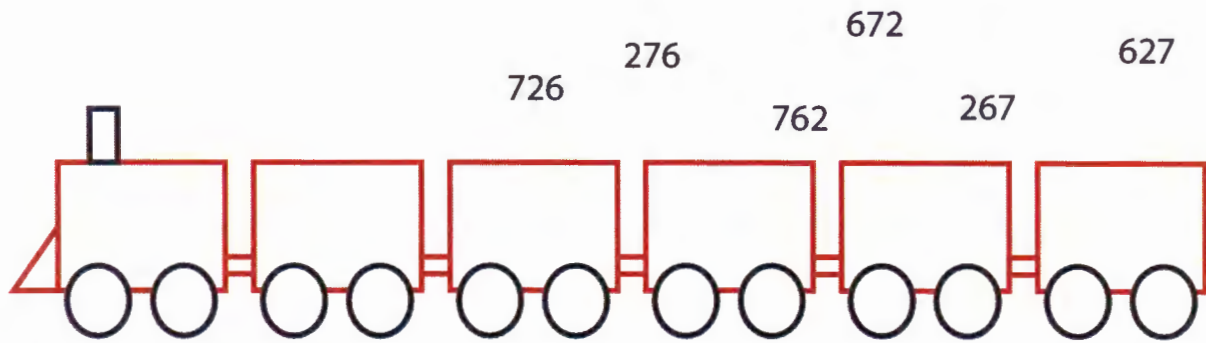
6.



_____ hundreds _____ tens
_____ ones = _____

Place Value: Number Fun!

Fill in the spaces below with the numbers in order from largest to smallest numbers.




The Heaviest: Learning Place Value


Rank each item in order from the heaviest to the lightest one.

Look at the weights in each category and write the order in the space below.


Truck



5792



5297



7259



5972



5729

Helicopter



1640



1460



1604




1046




1406


Train




11097




11907



11079



10197



11709

Airplane



178593



175983



175938



185793



187935



Practice Place Value: Fill in the Blank II

Fill in the blank spaces on the table or on the blank line using the clues.

thousands hundreds tens ones

	2	5	9
1	4	2	3
5	8	0	7
4	7	4	8
6	1	2	2
9	4	3	5
8	0	0	4

Two hundreds, five tens, and nine ones.

= _____

Three thousands, three hundreds,
four tens, and two ones.

= _____

= _____

= _____

= _____

Seven thousands, two hundreds,
eight tens, and four ones.

= _____

= _____

= _____

Color the Missing Number: "Less than"

Color the number that make the equation correct. See the example below.

(<) means "Less than"

$$9 + ? < 12$$

3	2	5
---	---	---

$$13 + ? < 20$$

6	7	8
---	---	---

$$14 + ? < 21$$

7	8	6
---	---	---

$$33 + ? < 44$$

10	11	12
----	----	----

$$28 + ? < 33$$

5	6	7
---	---	---

$$53 + ? < 62$$

12	10	7
----	----	---

$$70 + ? < 84$$


12	14	16	18
----	----	----	----

$$65 + ? < 97$$

34	32	36	30
----	----	----	----

Lemons and Limes

Draw a line to match the number to the words.



2,354

3 hundreds and 5 ones



305

6 tens and 7 ones




67

2 thousands, 3 hundreds,
5 tens, and 4 ones



598

5 thousands, 6 hundreds,
2 tens, and 3 ones



5,623

5 hundreds, 9 tens, and 8 ones


Write out the number **564** using words:

The Tallest: Learning Place Value






Rank each item in order from the tallest to the smallest one.

Look at the heights and write the correct orders in the space below.






House

				
497	947	749	479	974



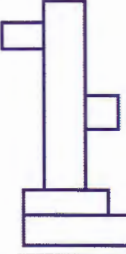


Tree

				
369	963	693	396	639

Building

				
1124	1412	1214	1142	1241

Monument

				
3658	3586	3685	5368	5638

Numbers: Expanded Form

Name _____ Date _____

Write the numeral.

1. $300 + 40 + 2 =$ 342

$900 + 30 + 1 =$ _____

2. $500 + 60 + 7 =$ _____

$400 + 70 + 4 =$ _____

3. $200 + 10 + 9 =$ _____

$600 + 40 + 3 =$ _____

4. $100 + 90 + 6 =$ _____

$800 + 20 + 6 =$ _____

5. $700 + 80 + 5 =$ _____

$100 + 20 + 3 =$ _____

Write the expanded form of each numeral.

6. $149 =$ 100 $+$ 40 $+$ 9

$267 =$ _____ $+$ _____ $+$ _____

7. $532 =$ _____ $+$ _____ $+$ _____

$451 =$ _____ $+$ _____ $+$ _____

8. $728 =$ _____ $+$ _____ $+$ _____

$986 =$ _____ $+$ _____ $+$ _____

9. $314 =$ _____ $+$ _____ $+$ _____

$698 =$ _____ $+$ _____ $+$ _____

10. $873 =$ _____ $+$ _____ $+$ _____

$555 =$ _____ $+$ _____ $+$ _____